

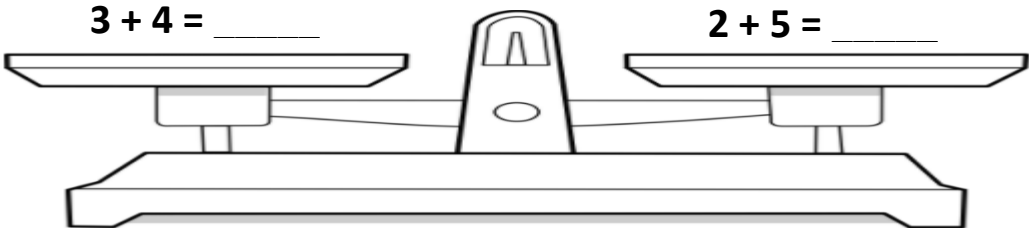
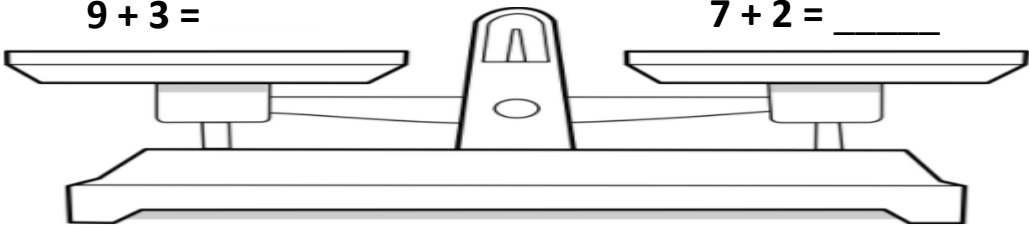
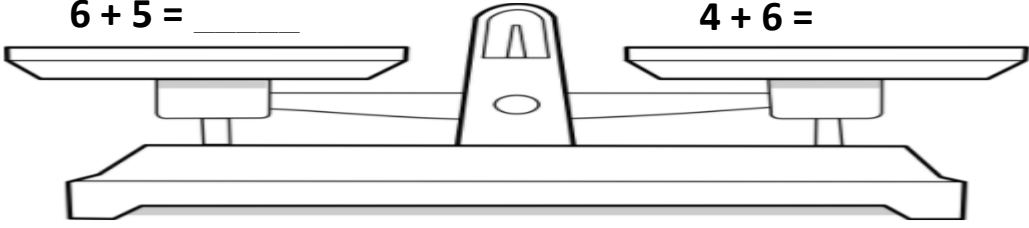
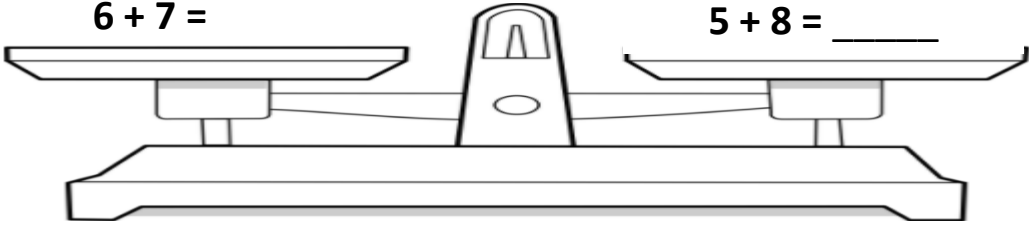


NOM: _____

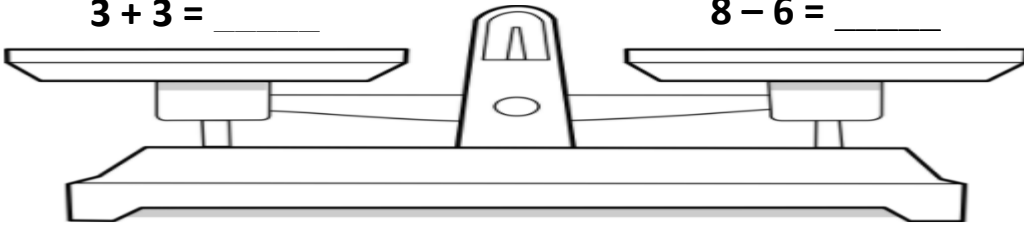
Addition et soustraction: Égal et inégal

Trouve la somme ou différence sur chaque côté de la balance. Entoure le symbole d'égal ou inégal pour chaque balance.

Balance	égal ou inégal  
 <p>$3 + 4 = \underline{\quad}$ $2 + 5 = \underline{\quad}$</p>	
 <p>$9 + 3 = \underline{\quad}$ $7 + 2 = \underline{\quad}$</p>	
 <p>$6 + 5 = \underline{\quad}$ $4 + 6 = \underline{\quad}$</p>	
 <p>$6 + 7 = \underline{\quad}$ $5 + 8 = \underline{\quad}$</p>	

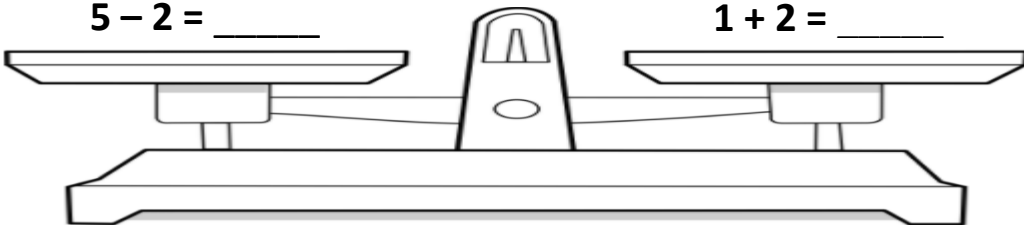
NOM: _____

$3 + 3 = \underline{\quad}$



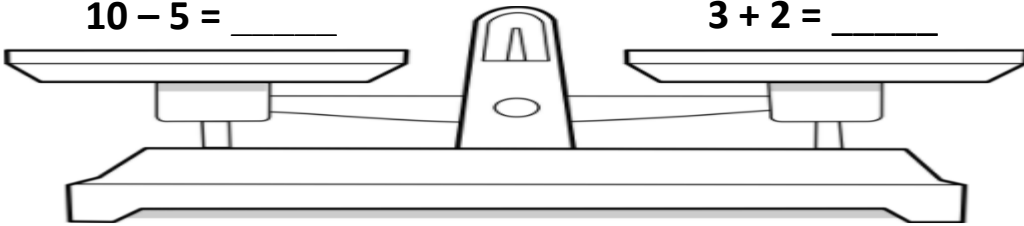
$8 - 6 = \underline{\quad}$

$5 - 2 = \underline{\quad}$



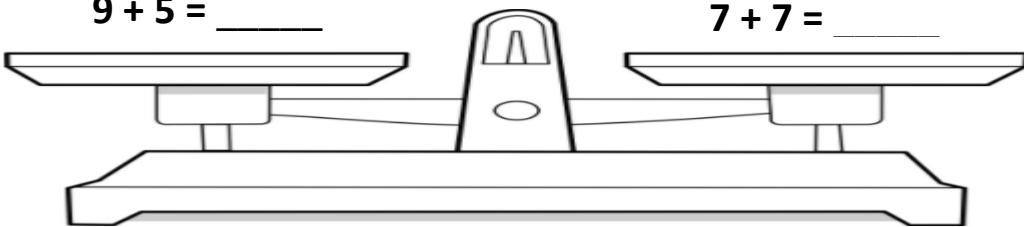
$1 + 2 = \underline{\quad}$

$10 - 5 = \underline{\quad}$



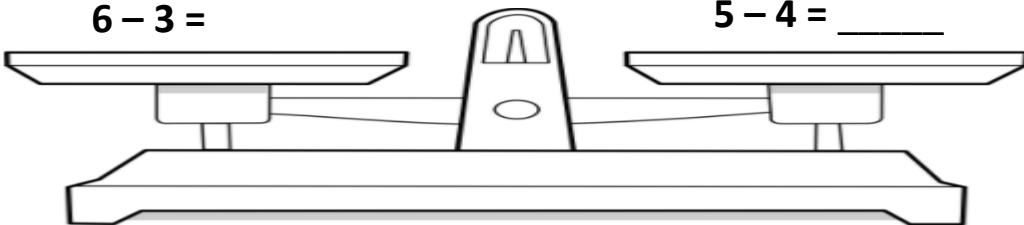
$3 + 2 = \underline{\quad}$

$9 + 5 = \underline{\quad}$



$7 + 7 = \underline{\quad}$

$6 - 3 = \underline{\quad}$



$5 - 4 = \underline{\quad}$